


Time Worksheet

Name: _____ School: _____

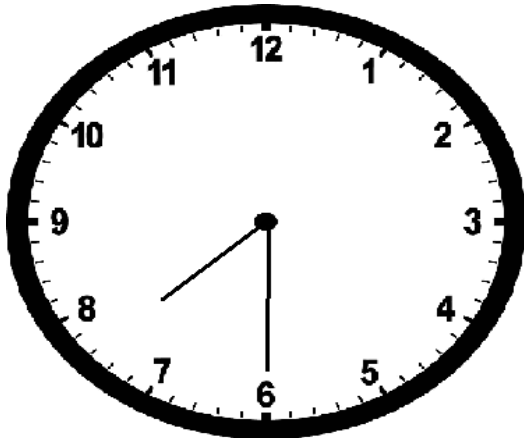


What is the time? _____

What is the time after 2 hours? _____

What is the time after 10 minutes? _____

What is the time after 4 hours and 30 minutes? _____




What is the time? _____

What is the time after 4 hours? _____

What is the time after 5 minutes? _____

What was the time 30 minutes ago? _____



The train leaves the station for Varanasi at 10'o clock in the morning. It took 7 hours and 30 minutes to reach there. At what time will it reach Varanasi?