



Nursery Maths Worksheet

Name: _____



Count the cylinders and match with corresponding numbers

5



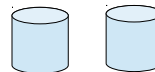
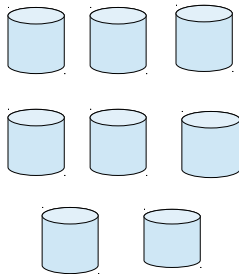
2

8



7

4



6